

MINISTRY OF EDUCATION



ANTIGUA AND BARBUDA

2013 GRADE SIX NATIONAL ASSESSMENT

SOCIAL STUDIES - PAPER 1

June 05, 2013

30 Marks

TIME: 50 Minutes

Answer ALL Questions

Read the Following Instructions Carefully

1. This paper has 30 questions. You have 50 minutes to answer them.
2. Each question has four possible answers: A, B, C, D
3. Read each question carefully then choose the correct answer.
4. On the answer sheet, find the number of the question you want to answer.
5. Shade the circle with the letter of the answer you have chosen.

Sample Question:

The highest point of land in Antigua is:

- A. Fig Tree Hill C. Shirley Heights
B. Mount Obama D. the Highlands

The correct answer is *Mount Obama*, so on your answer sheet you should shade the circle containing the letter *B*.



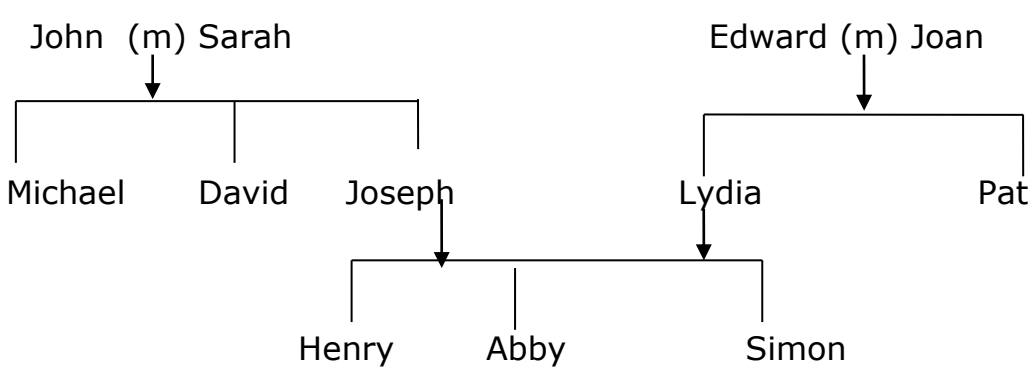
6. If you want to change your answer, be sure to erase your old answer completely and fill your new choice.
7. If you cannot answer a question, omit it and go on to the next one. You can come back to the harder question later.
8. Your score will be the total number of correct answers.

<p>1. Which of the following is NOT an island?</p> <p>A. Belize B. Antigua C. Martinique D. Bonaire</p>	<p>6. The _____ is the imaginary line which measures at $23\frac{1}{2}^{\circ}$ S.</p> <p>A. Equator B. Prime Meridian C. Tropic of Cancer D. Tropic of Capricorn</p>
<p>2. What is the average temperature of Antigua and Barbuda?</p> <p>A. 73° C B. 28° C C. 20° C D. 10° C</p>	<p>7. Which country had elections on the 21st March 2013?</p> <p>A. Grenada B. Barbados C. Barbuda D. St. Lucia</p>
<p>3. In which year did Antigua and Barbuda gain political independence?</p> <p>A. 1493 B. 1834 C. 1918 D. 1981</p>	<p>8. Which of the following is NOT a primary industry?</p> <p>A. Agriculture B. Fishing C. Mining D. Transportation</p>
<p>4. The Barbuda Council was established by the Barbuda Local Government Act in</p> <p>A. 1951 B. 1967 C. 1976 D. 1981</p>	<p>9. Which country won the 2013 Caribbean T20 championship?</p> <p>A. Barbados B. Guyana C. Trinidad and Tobago D. Grenada</p>
<p>5. Which pair of continents is nearest to Antigua and Barbuda?</p> <p>A. Asia and Africa B. North and South America C. Africa and Europe D. Europe and Asia</p>	<p>10. The Chairman of the Barbuda Council is</p> <p>A. Hilbourne Frank B. Fabien Jones C. Randolph Beazer D. Arthur Nibbs</p>

<p>11. Which of these lists outlines man's basic needs?</p> <p>A. car, education, clothes B. televisión, house, car C. education, television, car D. water, house, clothes</p>	<p>15. Joe Joseph was caught stoning his neighbour's house and he was arrested. Where would he be tried?</p> <p>A. Remand centre B. Court house C. Police station D. District prison</p>
<p>12. What was King Court's plan to end slavery?</p> <p>A. To get the slaves to kill their master B. To get the slaves to plan a party at Christmas C. To cut the cane before it spoils D. To get the slaves to sit down after Christmas holidays and not work until they are paid</p>	<p>16. What is meant by cottage industry?</p> <p>A. The making of goods outside the home for sale B. The making of goods in factories in large amounts for sale C. The making of goods at home in small amounts for sale D. The making of goods in the city for sale</p>
<p>13. Which is the best description of soil erosion?</p> <p>A. Clearing of the soil B. Washing away of the soil C. Digging up of the soil D. Burning of the soil</p>	<p>17. The Magnificent Frigate Bird Sanctuary in Barbuda</p> <p>A. supports the economy B. destroys the environment C. is a land based tourists attraction D. is managed by foreign investors</p>
<p>14. The Barbuda Council is a local authority that</p> <p>A. raises and collects revenue for the central government B. settles disputes in the courts C. provides transportation for its people D. manages day-to-day internal affairs on the island of Barbuda.</p>	<p>18. John lives with his father, mother and his three siblings. To which family type does John belong?</p> <p>A. Extended B. Sibling C. Nuclear D. Blended</p>

<p>19. What villages are known as the Free villages after Emancipation in Antigua?</p> <p>A. Freemansville, Potters, Greenbay B. Freemansville, Liberta, Freetown C. Clare Hall, Liberta, Freetown D. Freetown, Liberta, Old Road</p>	<p>20. Easter is a religious festival practised by</p> <p>A. Christians B. Hindus C. Moslems D. Rastafarians</p>
---	--

<p>21. If the time at Greenwich is 7:00am, what time is it at 45° W?</p> <p>45°W 30°W 15°W 0° 15°E 30°E 45°E</p> <p>↓ ↓ ↓ ↓ ↓ ↓ ↓</p> <p>A. 3:00 am B. 4:00 am C. 8:00 am D. 10:00 am</p>

<p>Study the family tree to answer questions 22 and 23.</p>  <pre>graph TD; JS[John (m) Sarah] --> M[Michael]; JS --> D[David]; JS --> J[Joseph]; EJ[Edward (m) Joan] --> L[Lydia]; EJ --> P[Pat]; JL[Joseph Lydia] --> H[Henry]; JL --> A[Abby]; JL --> S[Simon];</pre>	
--	--

<p>22. One of Abby's grandmothers would be</p> <p>A. Sarah B. Joseph C. Lydia D. Simon</p>	<p>23. How many generations are shown?</p> <p>A. 1 B. 2 C. 3 D. 4</p>
--	---

Questions 24 and 25 are based on Figure 1 which shows the directions of a compass.




Figure 1: Directions of a Compass

24. Which of these numbers labels the direction called west?

- A. 2
- B. 4
- C. 6
- D. 1

25. Which of these numbers represents south-east?

- A. 7
- B. 3
- C. 1
- D. 5

Table 1 shows sugar exports measured in tons from 1940 to 1944 from the sugar factory located at Gunthropes, Antigua. Use the table to answer questions 26 and 27.

Table 2: Sugar Exports

YEAR	TONS
1940	30,000
1941	35,000
1942	40,000
1943	45,000
1944	50,000

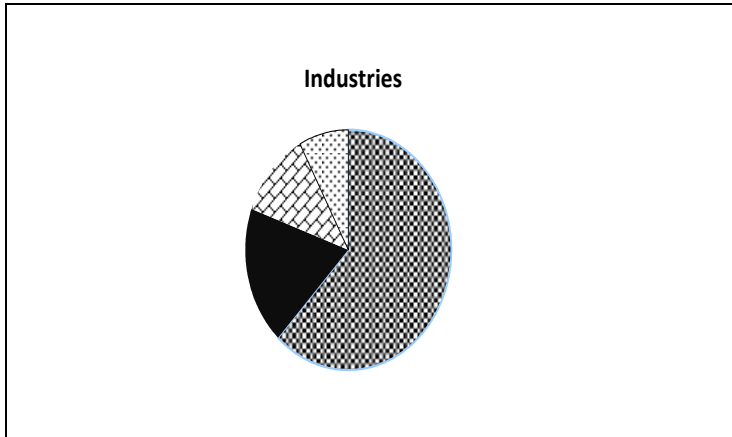
26. In which years did the factory export less than forty thousand tons of sugar?

- A. 1941 and 1943
- B. 1941 and 1942
- C. 1940 and 1941
- D. 1941 and 1944

27. What percentage of Gunthrope's total sugar export was sent abroad in 1944?

- A. 25%
- B. 35%
- C. 40%
- D. 50%

Figure 2 shows the main industries which provide income for country M. Use Figure 2 to answer questions 28 – 29.







	Construction
	Agriculture
	Sand mining
	Stone cutting

Figure 2: Main Industries of country M

28. Which industry provides the most income for the government of country M?

- A. Sand Mining
- B. Construction
- C. Agriculture
- D. Stone cutting

29. Which industry should the government discontinue because of low income?

- A. Sand mining
- B. Construction
- C. Agriculture
- D. Stone cutting

30. Which type of industry would agriculture be a part of?

- A. Primary industry
- B. Secondary industry
- C. Tertiary industry
- D. Quaternary industry